

Nome: _____

Escola: _____ turma: _____

Professor: _____ Data: _____


ATIVIDADE SOBRE AS HORAS

1. Ligue o relógio digital cujo o horário marcado esteja de acordo com o relógio analógico.

06:00

•


•



10:15

•


•



09:30

•


•



05:45

•

•



2. Que Horas são?



__ : __



__ : __



__ : __



__ : __

