


Count and choose the correct answer.

a. How many sides?




a. 4

b. 3



a. 2

b. 3



a. 0


b. 1



a. 4


b. 5

b. How many angles?




a. 4

b. 3



a. 2

b. 3



a. 0

b. 1



a. 4

b. 5