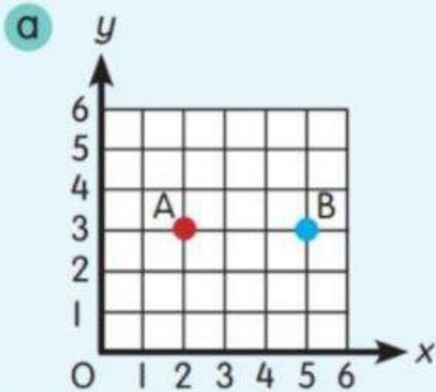




SELF-PRACTICE

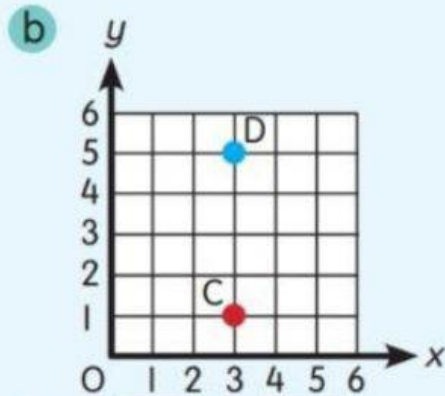
- 1 Write the horizontal and vertical distances between the points for the following planes.



From to

Horizontal distance: units

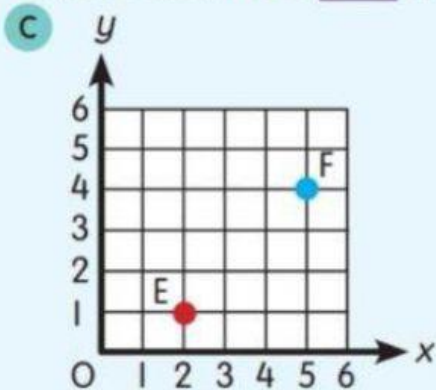
Vertical distance: unit



From to

Horizontal distance: unit

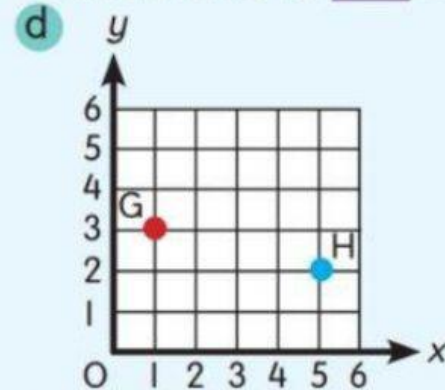
Vertical distance: units



From to

Horizontal distance: units

Vertical distance: units



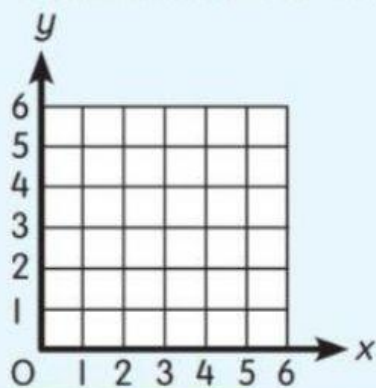
From to

Horizontal distance: units

Vertical distance: unit

- 2 Mark the Point P (0, 2) on the plane. State the coordinates of Point Q, given the distances from Point P.

- a Horizontal distance: 3 units
Vertical distance: 0 unit



- b Horizontal distance: 5 units
Vertical distance: 1 unit

