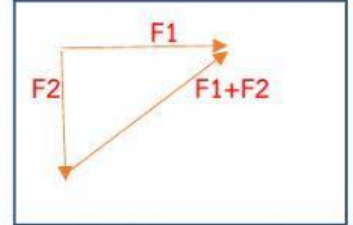
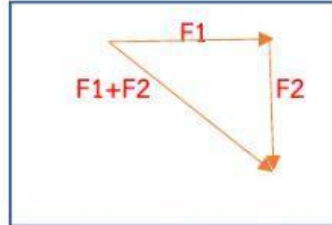


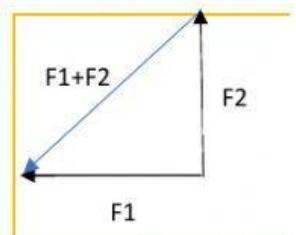
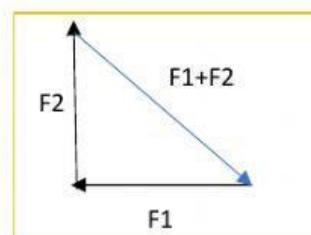
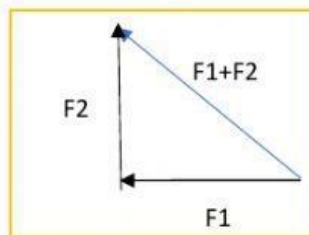
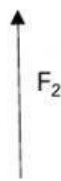
แบบฝึกหัด เรื่อง การหาแรงลัพธ์แบบทางต่อหัว

จงเลือกคำตอบของแรงลัพธ์ (resultant force) แบบทางต่อหัว ของ $F_1 + F_2$

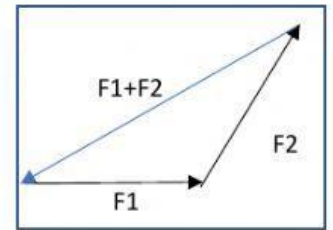
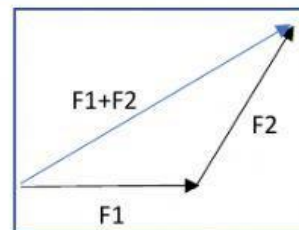
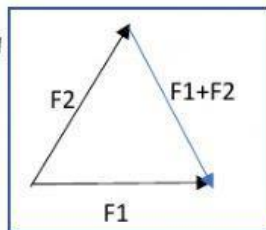
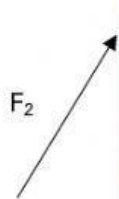
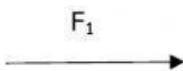
1.กำหนดให้



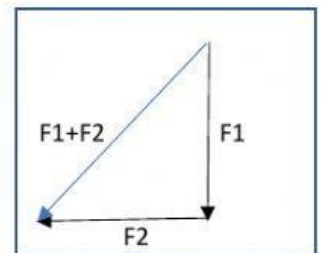
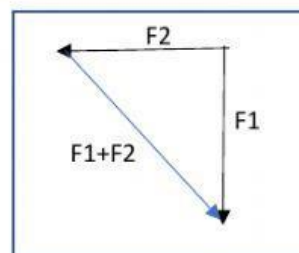
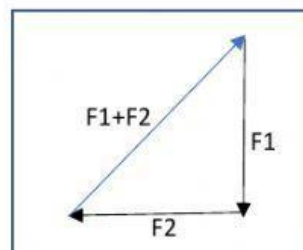
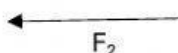

2.กำหนดให้



3.กำหนดให้



4.กำหนดให้



5.กำหนดให้

