

Taller Pedagógico Montebello - Primaria
English Department
Exam`s Practice - Science
Teacher: Succette Castellon Villegas.



Name:

- Classify these pictures into the three states of matter.

	<p>a. Gas</p> <p>b. Solid</p> <p>c. Liquid</p>
	<p>a. Gas</p> <p>b. Solid</p> <p>c. Liquid</p>



- a. Gas
- b. Solid
- c. Liquid




- a. Gas
- b. Solid
- c. Liquid




- a. Gas
- b. Solid
- c. Liquid

- Look for the meanings of these words.

Vapour.



Melted.




Matter



Water.




Freezing.



- Water cycle process, write in your own words what precipitation, condensation and evaporation mean.

Condensation:	
Evaporation:	
Precipitation:	

- Look at the three following jars and their states of matter's particles.




- Water cycle process, write in your own words what heating and cooling matter mean.

Heating matter and two examples:	
Cooling Matter and two examples:	

- Write in your own words what gas, liquid and solid mean

States of Matter.	Meaning.
Gas.	
Solid.	
Liquid.	

- Write in your own words the water cycle.

A large, solid blue rectangular area intended for a student to write their answer to the question about the water cycle.