

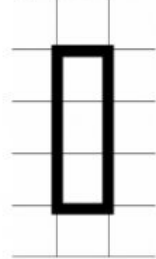
Name \_\_\_\_\_

Date \_\_\_\_\_

Year Group \_\_\_\_\_

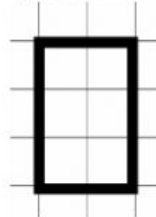
Find the Perimeter of the shapes if each square is 1 square centimeters.

Question 1



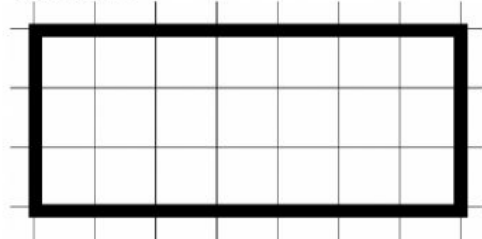
Answer: \_\_\_\_\_ *cm*

Question 2




Answer: \_\_\_\_\_ *cm*

Question 3



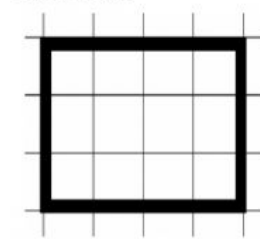
Answer: \_\_\_\_\_ *cm*

Question 4



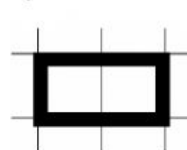
Answer: \_\_\_\_\_ *cm*

Question 5



Answer: \_\_\_\_\_ *cm*

Question 6



Answer: \_\_\_\_\_ *cm*