

CENTURIES

A century is a period of _____ years.

Complete the table with the correct years or centuries. Then complete the sentences with the correct century.

Beginning of Year	End of Year	Century
1	100	1st century
101	200	2nd century
	300	3rd century
701		8th century
1201	1300	
	1600	16th century
1701	1800	
1801		19th century
	2000	20th century
2001	2100	



We are living in the _____ century.

Columbus arrived in America in 1492. This was the _____ century.

Felipe VI came to the throne in 2014. This was the _____ century.

In 1212 the battle of Las Navas de Tolosa took place. This was the _____ century.

In 1936 the First World War (WWI) started. This was the _____ century.

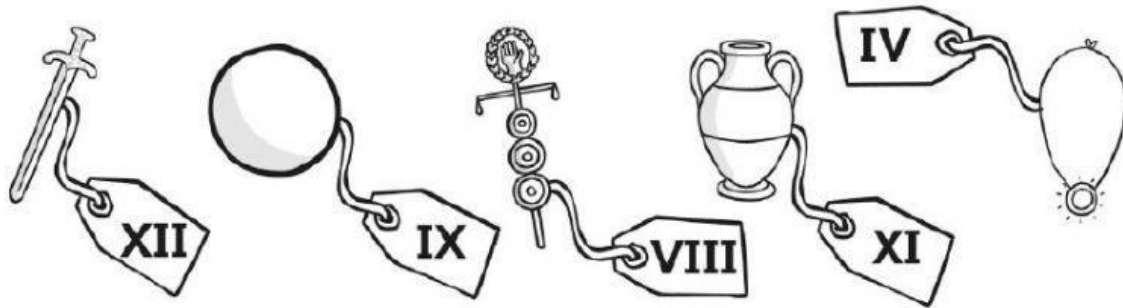
In 1469 the crowns of Castilla and Aragon united after the marriage of Isabel de Castilla and Fernando de Aragón. This was the _____ century.











In the year AD 43, the Romans invaded England (known as Britannia at the time) by force. This was the _____ century.

ROMAN NUMBERS

Here are some items which Romans used. When shopping, Romans used money, like us, but their numbers were different. Here are the prices of items for sale in **Roman numbers**. Imagine you are a Roman and that you are going shopping. Write down how much you spend every day. Write your answers in numbers and in Roman numbers.

1	2	3	4	5	6	7	8	9	10
I	II	III	IV	V	VI	VII	VIII	IX	X
11	12	13	14	15	16	17	18	19	20
XI	XII	XIII	XIV	XV	XVI	XVII	XVIII	XIX	XX



Shopping List	
Monday	 +  =
Tuesday	 +  =
Wednesday	 +  =
Thursday	 +  =
Friday	 +  =

Match the numbers to the correct Roman numerals

1

VI

2

III

3

X

4

VII

5

II

6

IV

7

VIII

8

IX

9

I

10

V

