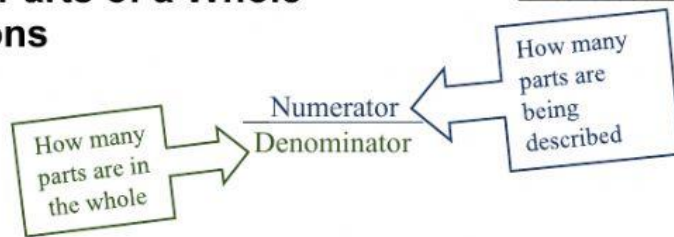


Describing Parts of a Whole with Fractions

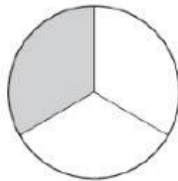
Name: _____



Write the fraction of the figure that is shaded.

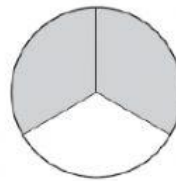
Example:

1

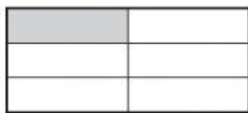


$$\frac{1}{3}$$

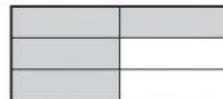
2




3



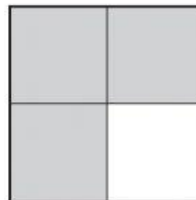
4



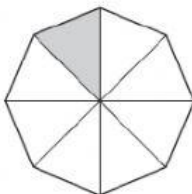
5



6



7



8

