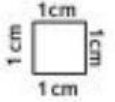


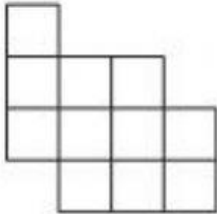
Name: \_\_\_\_\_

## Perimeter



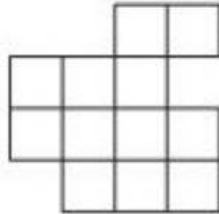
Find the perimeter of each shape.

1)



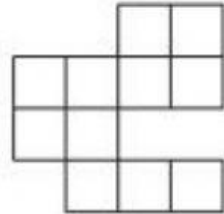
Perimeter = \_\_\_\_\_

2)




Perimeter = \_\_\_\_\_

3)



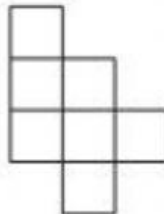
Perimeter = \_\_\_\_\_

4)




Perimeter = \_\_\_\_\_

5)



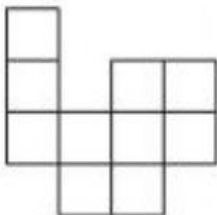
Perimeter = \_\_\_\_\_

6)




Perimeter = \_\_\_\_\_

7)



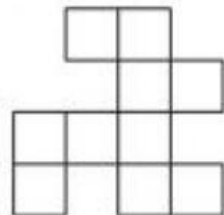
Perimeter = \_\_\_\_\_

8)



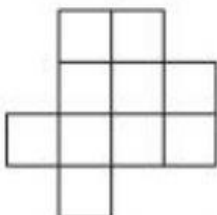
Perimeter = \_\_\_\_\_

9)



Perimeter = \_\_\_\_\_

10)



Perimeter = \_\_\_\_\_