


Name: _____ Class: _____ Date: _____

Review 1

- (1) Count.
Write the numbers.



There are _____ .



There are _____ .

- (2) Match.



•



•



•

• nine


• six

• eight





- (3) Write the number of fruits in the box.





- (4) Write the number of objects in the box.




- (5) Write the number of animals in the box.





(6) Write the number that has the smaller number in the box.




(7) Write the number that has the greater number in the box.



(8) Complete each number pattern.



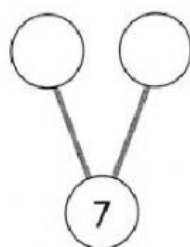

(9) Fill in the blanks.



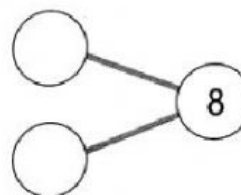
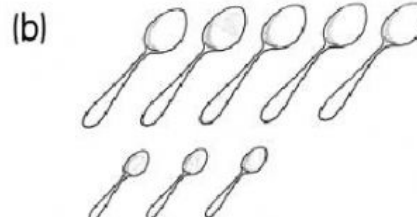
(a) 1 more than 5 is _____. (b) 1 less than 8 is _____.

(c) _____ is 1 less than 7. (d) _____ is 1 more than 9.

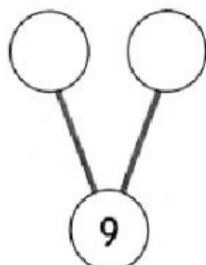
(10) Count and complete each number bond. Then fill in the blanks.



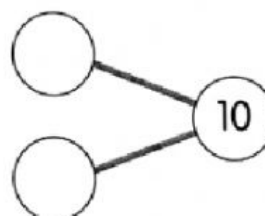
_____ and _____ make 7.



_____ and _____ make 8.



_____ and _____ make 9.



_____ and _____ make 10.



Challenging Practice (Performance Task)

(1) Use  to help you.

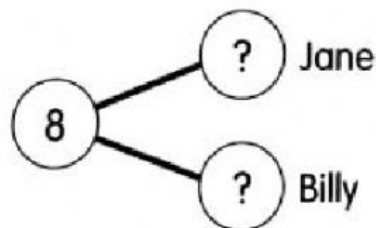
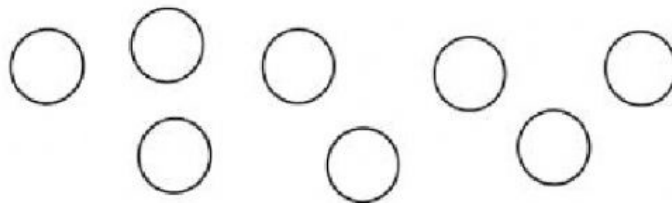
Jane and Billy have 8 counters altogether.



Jane has more counters than Billy.



How many counters does Jane have?



Jane has _____ counters.

(2) Use  to help you.

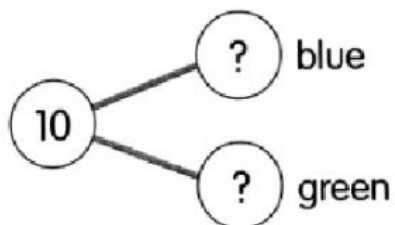
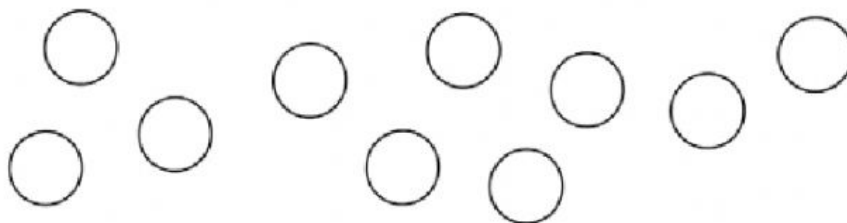
Amin has 10 blue marbles
and green marbles.



There are fewer blue marbles
than green marbles.



How many blue marbles are there?



There are _____ blue marbles.