

Name: _____

Date: _____

Worksheet 3 - Understand division (cont.)

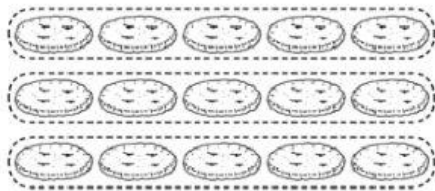
A. Vocabulary

model: mô hình

B. Practice


Write the division.

1.




$$\underline{\quad} 15 \div \underline{\quad} 3$$

2.



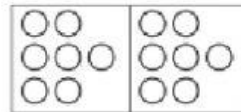
$$\underline{\quad} \div \underline{\quad}$$

3.



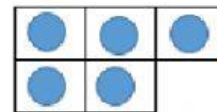

$$\underline{\quad} \div \underline{\quad}$$

4.



$$\underline{\quad} \div \underline{\quad}$$

5. Match each model with the true division.



$$5 \div 5$$

$$8 \div 4$$

$$18 \div 3$$

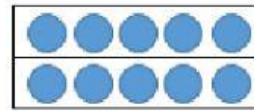
$$21 \div 3$$

6. Draw the model to show the problem.

There are 10 fish.

2 bears share equally.

How many fish does each bear get?



7. Draw the model and write the division.

The teacher has 16 books.

She shares into 4 students equally.

How many books does each student get?

Division: _____ ÷ _____

