



Ejercitemos



Suma y escribe el resultado correcto.



+



=



+



=



+



=



+



=



+



=







Ejercitemos




Suma y escribe el resultado correcto.



$$2 + 3 + 2 + 1 =$$



$$3 + 2 + 3 + 2 =$$



$$3 + 3 + 2 + 1 =$$