


**(A)** Padankan jenis bentuk muka bumi berikut dengan betul.

SP9.1.1 TP1

8

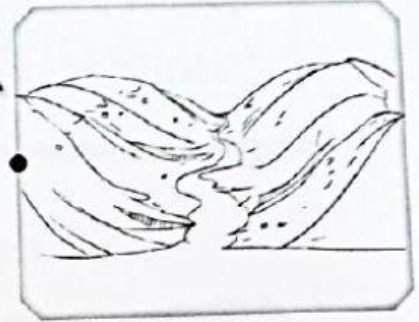
1



Laut

Tasik

5



2




Sungai

Gunung

6




3



Bukit

Lembah

7



4



Kolam

Pantai

8

