













NAME: \_\_\_\_\_

DATE: \_\_\_\_\_

## IS IT A SEGMENT, LINE, OR RAY?

Label each figure correctly!

Write segment, ray, or line.

 _____	 _____	 _____
 _____	 _____	 _____
 _____	 _____	 _____
 _____	 _____	 _____

Write segment, ray, or line.



\_\_\_\_\_



\_\_\_\_\_



\_\_\_\_\_



\_\_\_\_\_



\_\_\_\_\_



\_\_\_\_\_



\_\_\_\_\_



\_\_\_\_\_



\_\_\_\_\_



\_\_\_\_\_



\_\_\_\_\_



\_\_\_\_\_