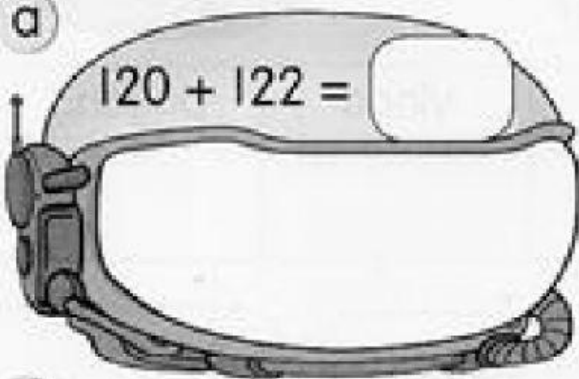




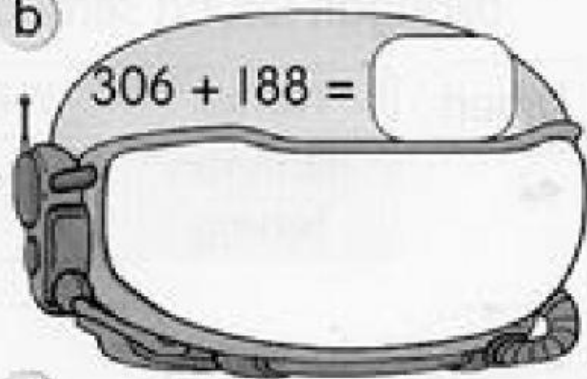
Cerdas Minda

Kira. Cari nombor pintu rahsia roket. Nombornya selain hasil tambah di bawah.

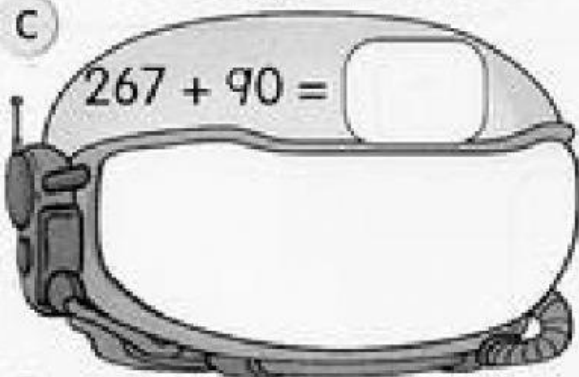
a



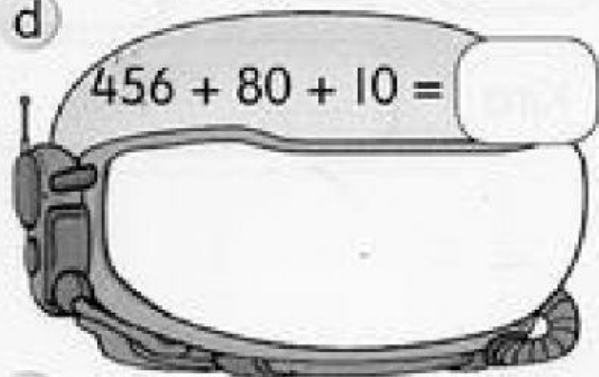
b



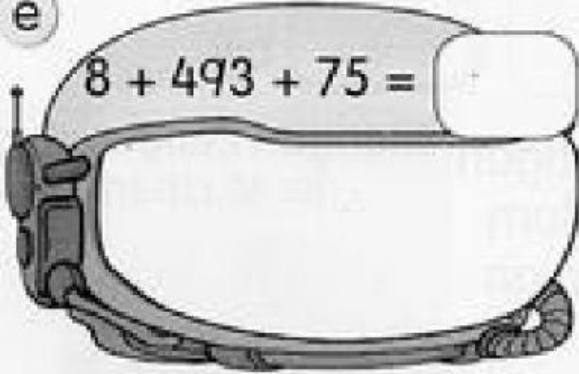
c




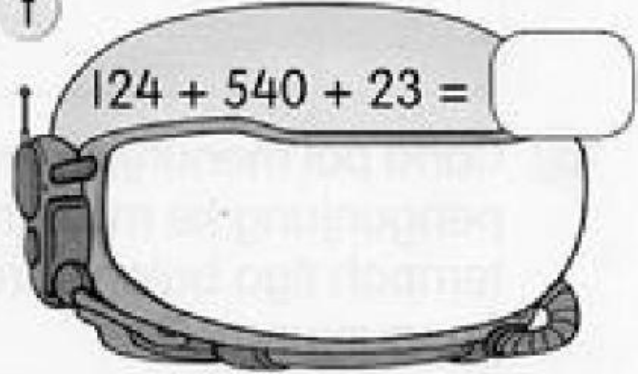
d



e



f



Nombor pintu rahsia roket ialah



4 Tambah. Bantu kancil mencari laluan yang jumlahnya 1000. Warnakan laluan.



MULA

$$\begin{array}{r} 3 \ 1 \ 7 \\ \ 3 \\ + \ 9 \ 0 \\ \hline \\ \hline \end{array}$$

$$\begin{array}{r} 2 \ 3 \ 4 \\ \ 2 \ 5 \\ + \ 5 \ 6 \\ \hline \\ \hline \end{array}$$

$$\begin{array}{r} 5 \ 4 \ 3 \\ \ 7 \ 7 \\ + \ 1 \ 0 \ 8 \\ \hline \\ \hline \end{array}$$



$$\begin{array}{r} 8 \ 8 \ 0 \\ \ 3 \\ + \ 1 \ 1 \ 7 \\ \hline \\ \hline \end{array}$$

$$\begin{array}{r} 6 \ 1 \ 3 \\ 3 \ 0 \ 1 \\ + \ 8 \ 6 \\ \hline \\ \hline \end{array}$$

$$\begin{array}{r} 4 \ 3 \ 7 \\ 1 \ 1 \ 5 \\ + \ 2 \ 0 \ 8 \\ \hline \\ \hline \end{array}$$

$$\begin{array}{r} 2 \ 4 \ 6 \\ 1 \ 5 \ 1 \\ + \ 4 \ 0 \ 6 \\ \hline \\ \hline \end{array}$$

$$\begin{array}{r} 3 \ 1 \ 6 \\ \ 9 \ 0 \\ + \ 2 \ 2 \ 4 \\ \hline \\ \hline \end{array}$$

$$\begin{array}{r} 4 \ 7 \ 1 \\ 2 \ 5 \ 5 \\ + \ 2 \ 7 \ 4 \\ \hline \\ \hline \end{array}$$

$$\begin{array}{r} 5 \ 3 \ 8 \\ \ 7 \ 1 \\ + \ 1 \ 0 \ 0 \\ \hline \\ \hline \end{array}$$

$$\begin{array}{r} 1 \ 2 \\ 6 \ 9 \ 4 \\ + \ 1 \ 8 \ 4 \\ \hline \\ \hline \end{array}$$

$$\begin{array}{r} 4 \ 6 \ 8 \\ 1 \ 4 \ 1 \\ + \ 2 \ 8 \ 6 \\ \hline \\ \hline \end{array}$$

$$\begin{array}{r} 3 \ 1 \ 9 \\ 1 \ 5 \ 0 \\ + \ 5 \ 3 \ 1 \\ \hline \\ \hline \end{array}$$

$$\begin{array}{r} 1 \ 0 \ 1 \\ \ 9 \ 0 \\ + \ 8 \ 0 \ 9 \\ \hline \\ \hline \end{array}$$



SAMPAI

