

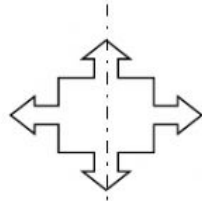
KENDRIYA VIDYALAYA CRPF GC NAGPUR

WORKSHEET

Does It Look the Same?

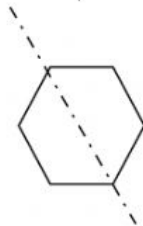
CLASS 5

1. Check if the dotted line divides the given figure into mirror halves.



Yes

No



Yes

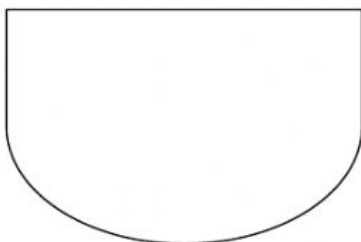
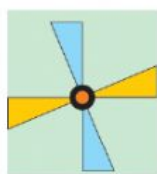
No



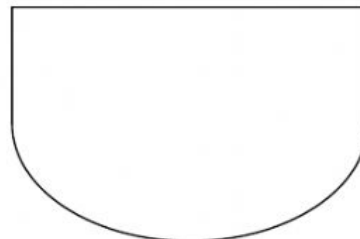
Yes

No

2. Drag and drop in suitable basket



same after $\frac{1}{4}$ turn



not same after $\frac{1}{4}$

3. Which look same after given the said turn ? Write 'Y' or 'N' in the Box.

