



## OSSERVA IL DISEGNO ED ESEGUI LE ADDIZIONI

(ADDIZIONARE = METTERE INSIEME E VEDERE QUANTI ELEMENTI CI SONO IN TUTTO)



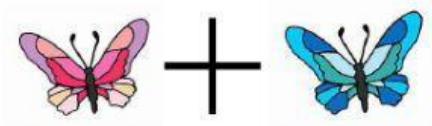
$$2 + 3 =$$




$$1 + 2 =$$



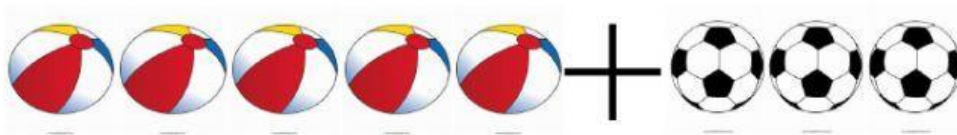
$$4 + 2 =$$




$$1 + 1 =$$



$$3+4=$$



$$5+3=$$



$$5+0=$$



$$2+7=$$