

Markah:

MATEMATIK TINGKATAN 5

BAB 6: NISBAH & GRAF FUNGSI TRIGONOMETRI

Padankan setiap yang berikut berdasarkan graf yang betul

$y = \sin x$

$y = \cos x$

$y = \tan x$

$y = \sin x$

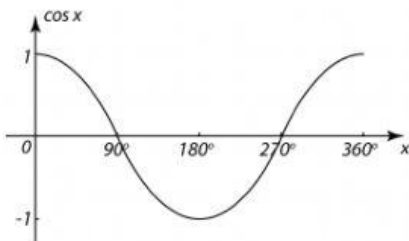
$y = \cos x$

$y = \sin x$

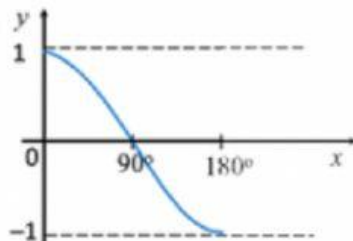
$y = \tan x$

$y = \sin x$

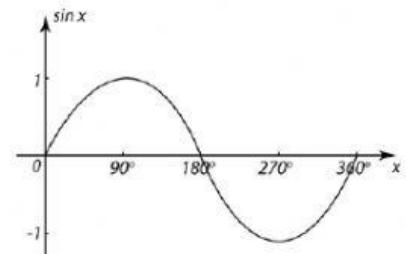
$y = \cos x$



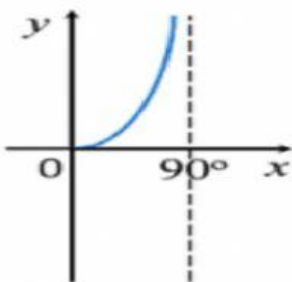
Jawapan: _____



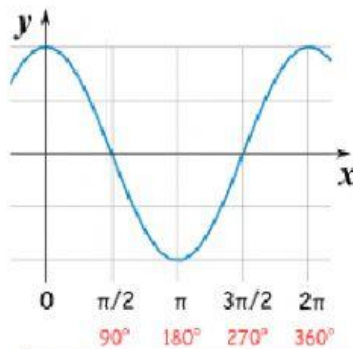
Jawapan: _____



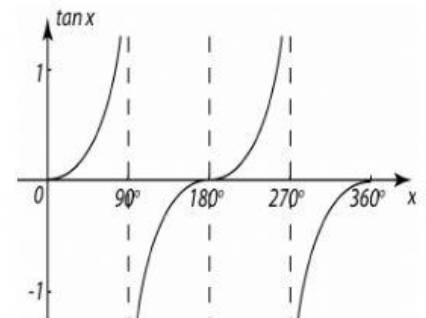
Jawapan: _____



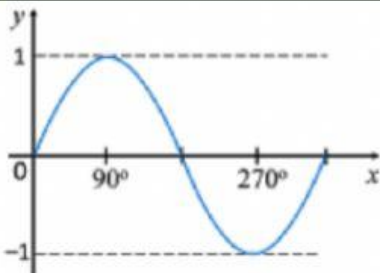
Jawapan: _____



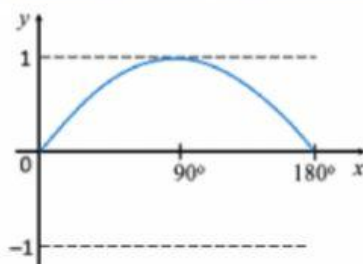
Jawapan: _____



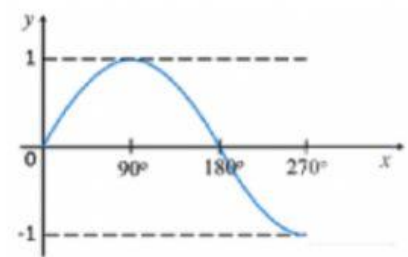
Jawapan: _____



Jawapan: _____



Jawapan: _____



Jawapan: _____