


4TH GRADE – MATHS

DECIMALS

INTERACTIVE WORKSHEET 02

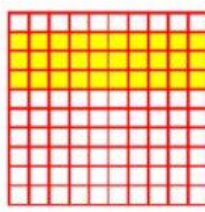
I. What fraction of each square is shaded? Write each fraction in the decimal form.

a.



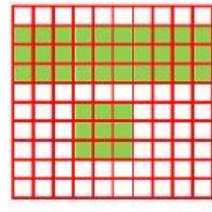
Decimal form : ____

b.



Decimal form : ____

c.



Decimal form : ____

II. Write each of the following as decimals.

(a) Two point two =

(b) Forty point six two =

(c) Fourteen point eight =

(d) Sixty - two point one =

(e) Twenty - six point five =

(f) One hundred twelve point three six five =



AIMS-INDIA



LIVEWORKSHEETS