


All about Maths









1. Look, read and write



- ① How much are the yoghurts?
They're forty pence.
- ② How much is the popcorn?
It's _____ pence.
- ③ How much is the water?
It's _____ pence.
- ④ How much are the cherries?
They're _____ pence.
- ⑤ How much are the birthday cards?
They're _____ pence.

2. Write and say

Thirty and twenty is fifty.

- ①  +  $\underline{30} + \underline{20} = \underline{\quad}$
- ②  +  $\underline{\quad} + \underline{\quad} = \underline{\quad}$
- ③  +  $\underline{\quad} + \underline{\quad} = \underline{\quad}$
- ④  +  $\underline{\quad} + \underline{\quad} = \underline{\quad}$