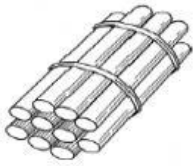


## TOPIC: COUNTING IN TENS

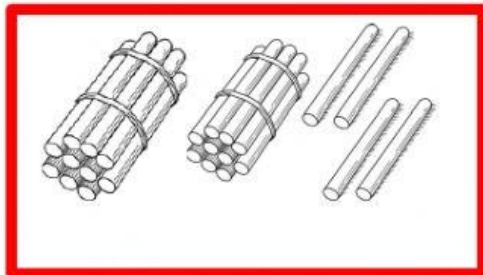
GRADE: 2

SUBJECT: MATHEMATICS



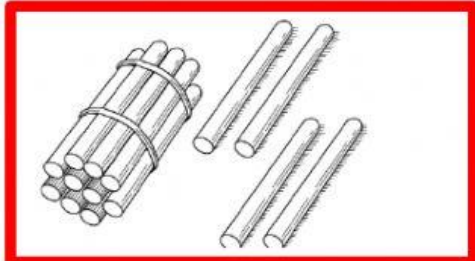
ONE BUNDLE OF STICKS = 10 STICKS

1. How many sticks are there in each box?




=

$$\square + \square = \square$$




=

$$\square + \square = \square$$




=

$$\square + \square = \square$$



=

$$\square + \square = \square$$



=

$$\square + \square = \square$$

Ms. C. GAUTAM