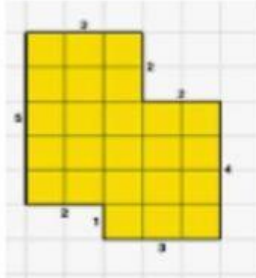


Interactive Worksheet (Multiple choice questions)

Topic – area and perimeter class -5 Maths

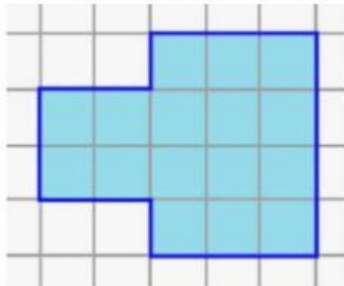
Q.1 find the perimeter of given figures by counting squares .

A)



- 1) 21 cm
- 2) 22 cm
- 3) 23 cm
- 4) 24 cm

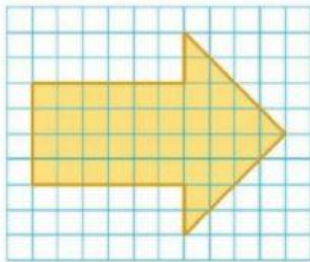
B)



- 1) 15 cm
- 2) 18 cm
- 3) 16 cm
- 4) 19 cm

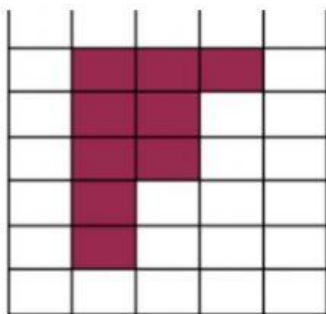
Q.2 find the area by counting squares –

A)



- 1) 40 sq. cm
- 2) 36 sq. cm
- 3) 38 sq. cm
- 4) 41 sq. cm

B)



- 1) 10 sq. Cm
- 2) 7 sq. cm
- 3) 9 sq. cm
- 4) 8 sq. cm