



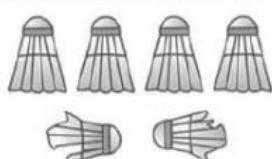


Choose correct answer and write correct answers



RECOGNISE SUBTRACTION

Activity I

Look at the pictures. Underline the correct answers.

- a  There are 5 dolls.
The little sister takes away 3 dolls. There are 2 dolls
(less, left).
- b  There are 10 pencils.
Take away 5 pencils.
There are 5 pencils
(left, total).
- c  2 out of 6 shuttlecocks are broken.
There are 4 (broken, good)
shuttlecocks left.
- d  The difference between
the spoons and the cups
is (4, 5).
- e  I eat 4
strawberries.  I eat 1 less
than Akil.
Fatin eats (5, 3) strawberries.

Activity 2

Complete these.

- a 3 minus 2 equals .
- b Take away 2 from 5 is .
- c Minus 3 from 8 is .
- d The difference between 8 and 4 is .
- e less than 5 is 4.
- f 3 is 6 less than .

