

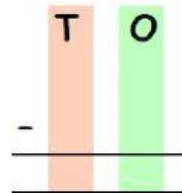
1ST GRADE - MATHS

ADDITION & SUBTRACTION UP TO 99

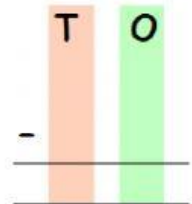
INTERACTIVE WORKSHEET 04

I. Word problems on Subtraction

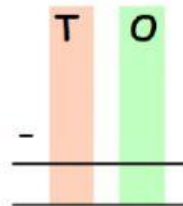
1. A milkman sold 42 litres of milk out of 93 litres. How many litres of milk is left with him?



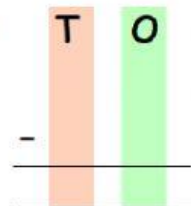
2. There are 69 balloons. 32 of them burst. How many are left?



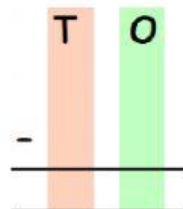
3. Aarna has Rs.99. She buys a teddy bear which costs Rs.68. How much money is left with her?



4. Ronav has Rs.95. He buys a toy train for Rs.75. How much money is left with him?



5. There are 78 butterflies in a park. 23 of them fly away. How many butterflies are left?



AIMS-INDIA

