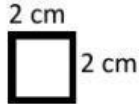


Name _____

Date _____

Year Group _____

Find the area of the following figures (1-4)
if each square is

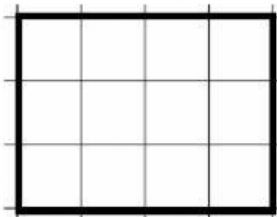


1.



Answer = _____ cm^2

2.




Answer = _____ cm^2

3.



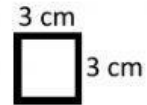
Answer = _____ cm^2

4.




Answer = _____ cm^2

Find the area of the following figures (5-8)
if each square is




5.



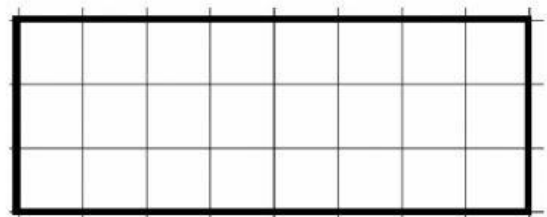
Answer = _____ cm^2

6.



Answer = _____ cm^2

7.



Answer = _____ cm^2

8.



Answer = _____ cm^2