

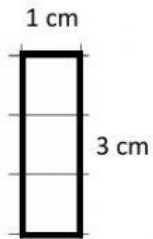
Name \_\_\_\_\_

Date \_\_\_\_\_

Year Group \_\_\_\_\_

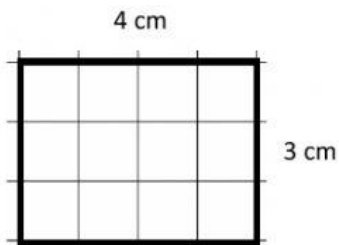
Find the area of the following figures

1.



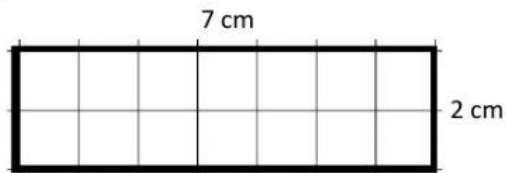
Answer = \_\_\_\_\_  $cm^2$

2.



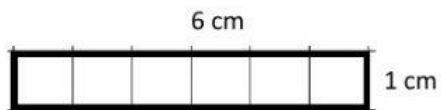
Answer = \_\_\_\_\_  $cm^2$

3.



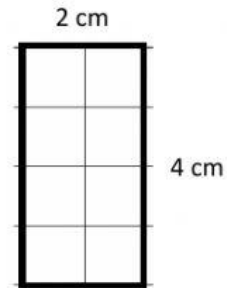
Answer = \_\_\_\_\_  $cm^2$

4.



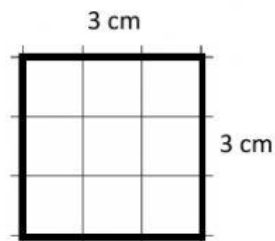
Answer = \_\_\_\_\_  $cm^2$

5.



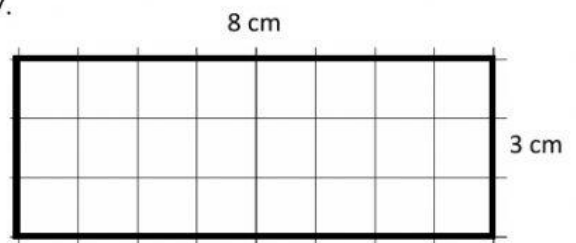
Answer = \_\_\_\_\_  $cm^2$

6.



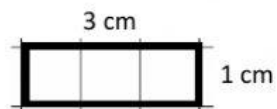
Answer = \_\_\_\_\_  $cm^2$

7.



Answer = \_\_\_\_\_  $cm^2$

8.



Answer = \_\_\_\_\_  $cm^2$