

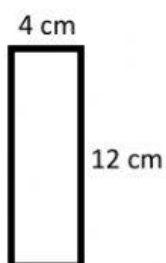
Name _____

Date _____

Year Group _____

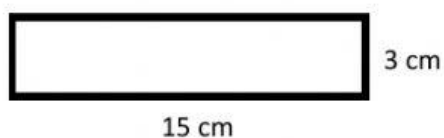
Find the area of the following figures

1.



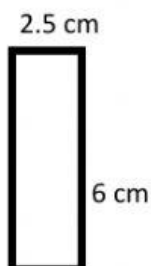
Answer = _____ cm^2

2.



Answer = _____ cm^2

3.



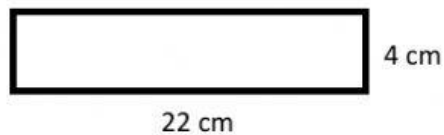
Answer = _____ cm^2

4.



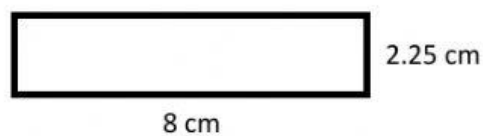
Answer = _____ cm^2

5.



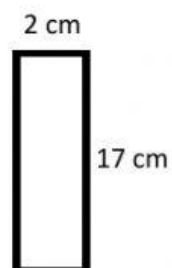
Answer = _____ cm^2

6.



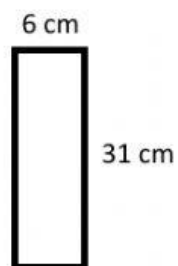
Answer = _____ cm^2

7.



Answer = _____ cm^2

8.



Answer = _____ cm^2