

Match the description or picture to either Globe or Map (3 to each word)

6 Most accurate

Map



Easy to use

Globe

A flat drawing or model of an area of land showing physical features, cities, roads, etc.

3D spherical model of the earth

7

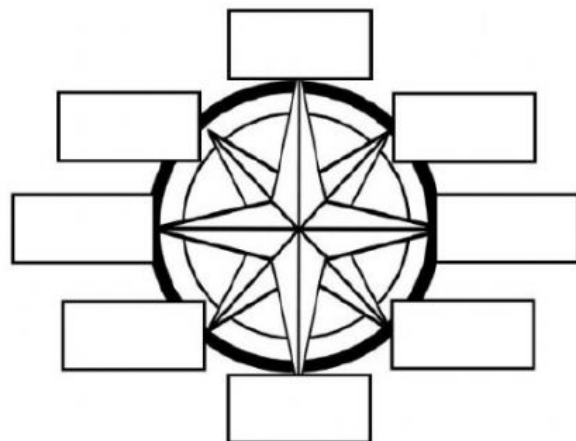
Fill in the blanks

The main or primary directions on a compass rose are North, East, South, West. These are called the _____ directions.

The directions in the middle of the primary directions are called the _____ directions. They are Northeast, Southeast, Northwest, Southwest.

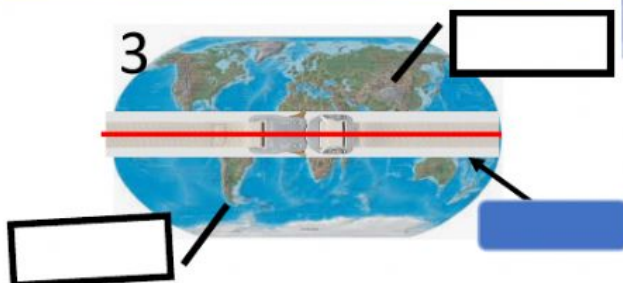
What is a photo? _____

8



East	North	South	West
Northeast	Northwest	Southwest	Southeast

3



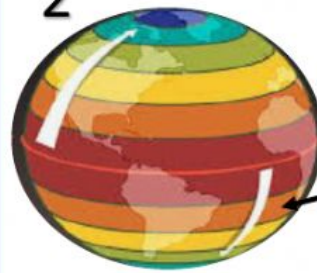
Northern Hemisphere
Southern Hemisphere
Equator

1

Cardinal Directions	Intermediate Directions

South
Southeast
Southwest
North
Northeast
Northwest
East
West

2



Lines that go LONG-ways, all the way around the Earth:

4



Lines that go North and South (up and down), like a ladder:

5

US Regions

Midwest
Southeast
Northeast
Southwest
Northwest

Northeast
Southeast
Southwest
Midwest
West



0 250 500 miles

Scale
Compass Rose
Legend/ Key

