








SARASAS SUKSAWAD SCHOOL

Name: _____ Grade: _____ No.: _____

Mathematics Grade 5

Listening test:

-  1. a. parallel lines b. lines c. ray d. line segment
-  2. a. line b. geometry c. dimension d. operation
-  3. a. acute angle b. obtuse angle c. right angle d. reflex angle
-  4. a. straight angle b. interior angles c. alternate angles d. right angle
-  5. a. exponent b. endpoint c. thousands d. expanded notation

Writing test:

1. Write this number 25,005 in words.

2. Geometry is the study of figures and _____

3. What thing is used to measure angles?

4. What angles always make a letter "F" shape?

5. What operation is used to find the sum?