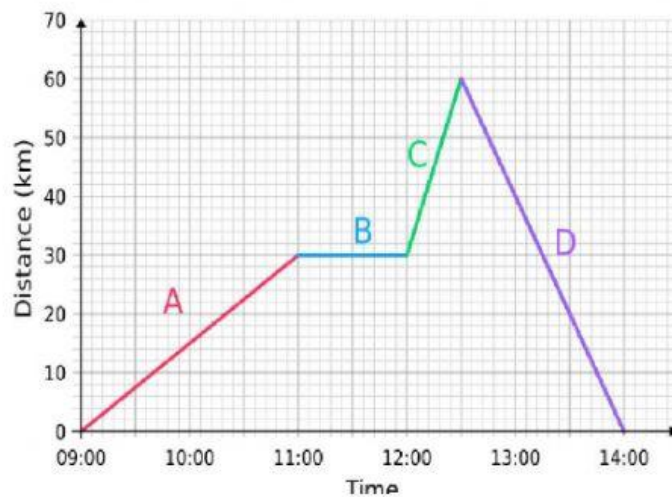


The picture here shows :

Drag and drop the letter in the correct box:



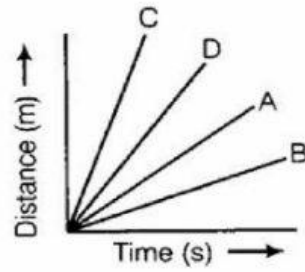
the car started moving

the car is at rest

the car is at the fastest speed

the car went back to its starting point

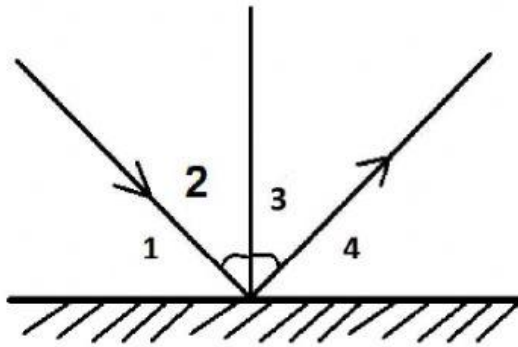
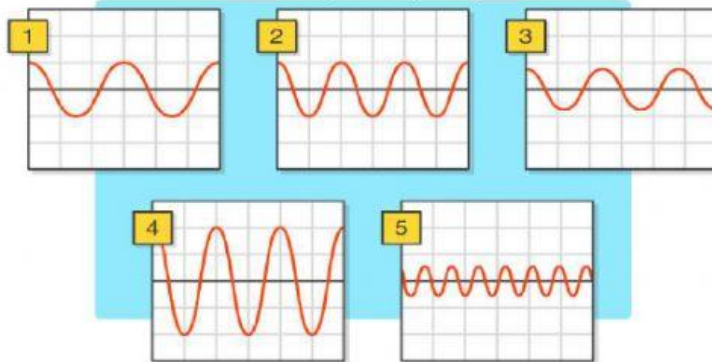
The distance time graph shows four cars: A,B,C and D. Choose the car with the greatest speed :



Fill in the blank:

the loudest sound refers to wave:

the sound with the highest frequency refers to wave:



match the angle with its description:

angle of incidence

angle of reflection

90-angle of reflection

90-angle of incidence