

# KENDRIYA VIDYALAYA AFS WADSAR

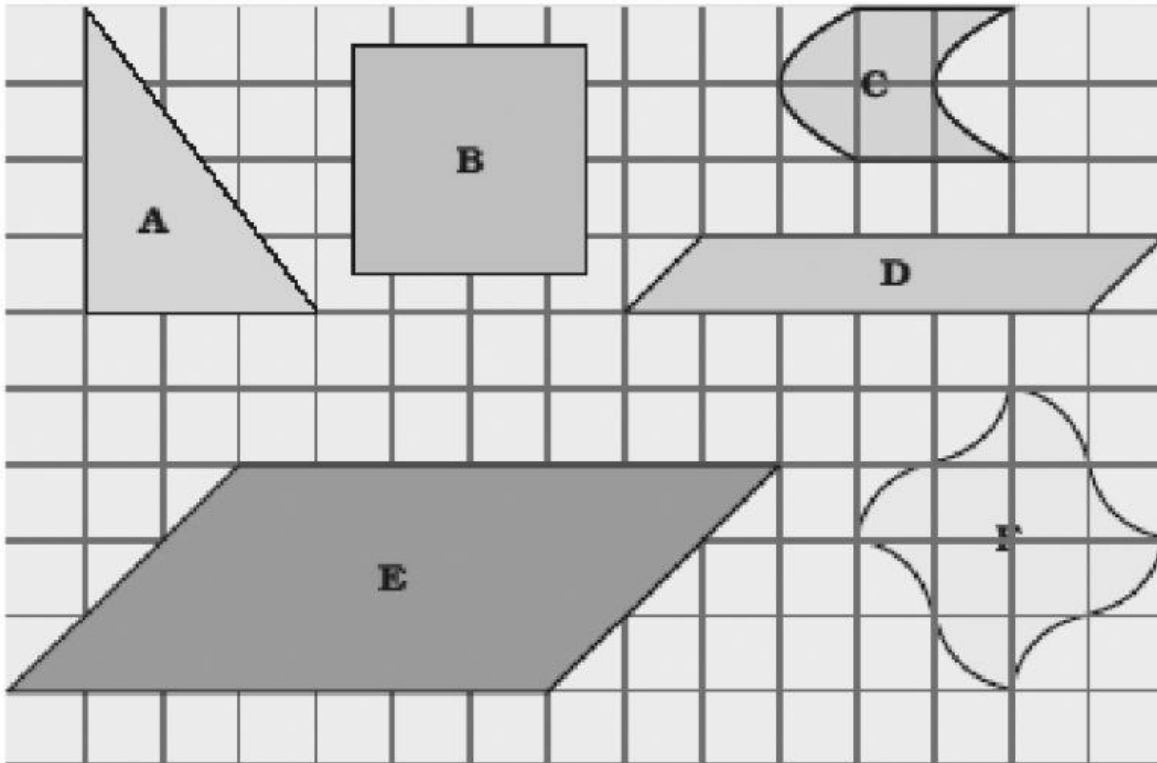
## WORK SHEET

CLASS – V

SUB - MATHS

TOPIC : How Many Squares?

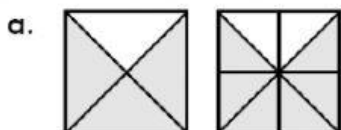
Que1 Write the area(in square cm) of shapes below.



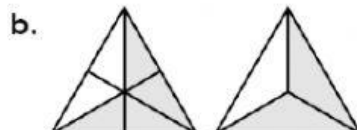
A. \_\_\_\_\_ Sq. Cm    B. \_\_\_\_\_ Sq. Cm    C. \_\_\_\_\_ Sq. Cm

D. \_\_\_\_\_ Sq. Cm    E. \_\_\_\_\_ Sq. Cm    F. \_\_\_\_\_ Sq. Cm

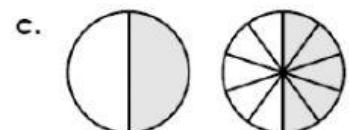
Que 2 Fill in the missing fraction parts.



$$\frac{3}{4} = \frac{\quad}{8}$$



$$\frac{4}{6} = \frac{\quad}{3}$$



$$\frac{1}{2} = \frac{\quad}{10}$$