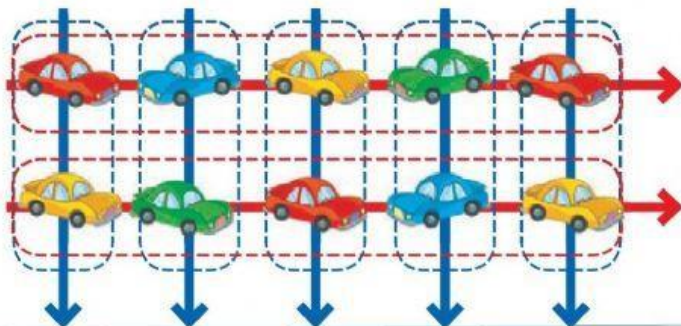
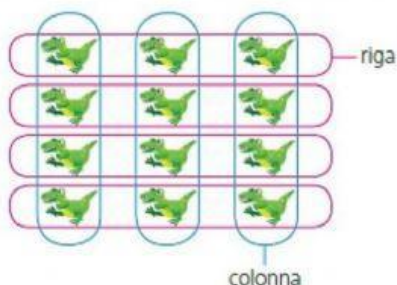


GLI SCHIERAMENTI

- 1 Scrivi nelle caselle il numero dei disegni di ogni riga e di ogni colonna. Completa, poi, le due addizioni e le due moltiplicazioni.



$$\square \times \square = \square$$



Numero colonne


4 dinosauri in ogni colonna
ripetuti per 3 colonne

Operazione: $\square \times \square = \square$



Numero colonne


$$\square \times \square = \square$$



colonne \square

righe \square


$$\square \times \square = \square$$



colonne \square

righe \square


$$\square \times \square = \square$$



colonne \square

righe \square

$$\square \times \square = \square$$



colonne \square

righe \square

$$\square \times \square = \square$$