




Teorema de Pitágoras

HALLAR LAS FUNCIONES TRIGONOMÉTRICAS DE LOS SIGUIENTES TRIÁNGULOS RECTÁNGULOS



$$\begin{aligned}
 &= h^2 + \\
 &= \quad + \\
 &= \\
 \sqrt{\quad} &= \sqrt{\quad} \\
 &=
 \end{aligned}$$

$$\text{Sen } \hat{H} = \text{---}$$

$$\text{Cos } \hat{H} = \text{---}$$

$$\text{Tag } \hat{H} = \text{---}$$

$$\text{Ctg } \hat{H} = \text{---}$$

$$\text{Sec } \hat{H} = \text{---}$$

$$\text{Csc } \hat{H} = \text{---}$$

$$\text{Sen } \hat{F} = \text{---}$$

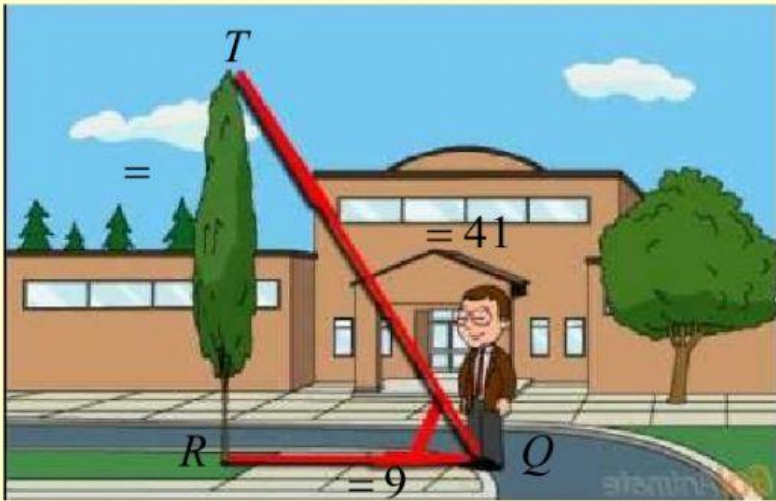
$$\text{Cos } \hat{F} = \text{---}$$

$$\text{Tag } \hat{F} = \text{---}$$

$$\text{Ctg } \hat{F} = \text{---}$$

$$\text{Sec } \hat{F} = \text{---}$$

$$\text{Csc } \hat{F} = \text{---}$$



$$\begin{aligned}
 &= t^2 + \\
 &= \quad + \\
 &= \\
 &= \\
 \sqrt{\quad} &= \sqrt{\quad} \\
 &=
 \end{aligned}$$

$$\text{Sen } \hat{T} = \text{---}$$

$$\text{Sen } \hat{Q} = \text{---}$$

$$\text{Cos } \hat{T} = \text{---}$$

$$\text{Cos } \hat{Q} = \text{---}$$

$$\text{Tag } \hat{T} = \text{---}$$

$$\text{Tag } \hat{Q} = \text{---}$$

$$\text{Ctg } \hat{T} = \text{---}$$

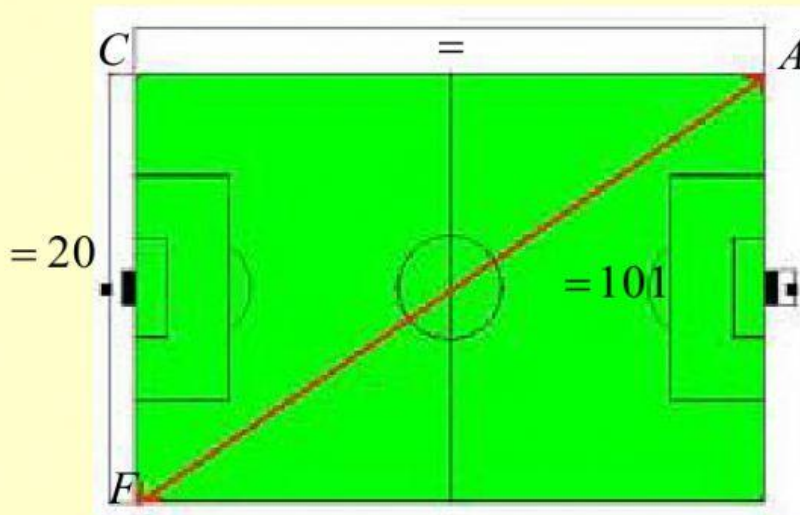
$$\text{Ctg } \hat{Q} = \text{---}$$

$$\text{Sec } \hat{T} = \text{---}$$

$$\text{Sec } \hat{Q} = \text{---}$$

$$\text{Csc } \hat{T} = \text{---}$$

$$\text{Csc } \hat{Q} = \text{---}$$



$$\begin{aligned}
 &= a^2 + \\
 &= + \\
 &= \\
 &= \\
 &= \\
 &= \sqrt{\quad} = \sqrt{\quad} \\
 &=
 \end{aligned}$$

$$\text{Sen } \hat{A} = \text{---}$$

$$\text{Cos } \hat{A} = \text{---}$$

$$\text{Tag } \hat{A} = \text{---}$$

$$\text{Ctg } \hat{A} = \text{---}$$

$$\text{Sec } \hat{A} = \text{---}$$

$$\text{Csc } \hat{A} = \text{---}$$

$$\text{Sen } \hat{F} = \text{---}$$

$$\text{Cos } \hat{F} = \text{---}$$

$$\text{Tag } \hat{F} = \text{---}$$

$$\text{Ctg } \hat{F} = \text{---}$$

$$\text{Sec } \hat{F} = \text{---}$$

$$\text{Csc } \hat{F} = \text{---}$$