

1. How many days are there in a week? There are...

2. Name all the days of a week.

3. Which is the first day of the week? It is ...

4. Which is the last day of the week? It is...

5. Which day comes after Wednesday?

6. What is the name of the third day of the week?

7. Fill in the blanks:

(i) _____ comes before Tuesday.

(ii) _____ comes before Friday.

(iii) Saturday comes after _____.

(iv) Thursday comes after _____.

(v) _____ comes after Saturday.

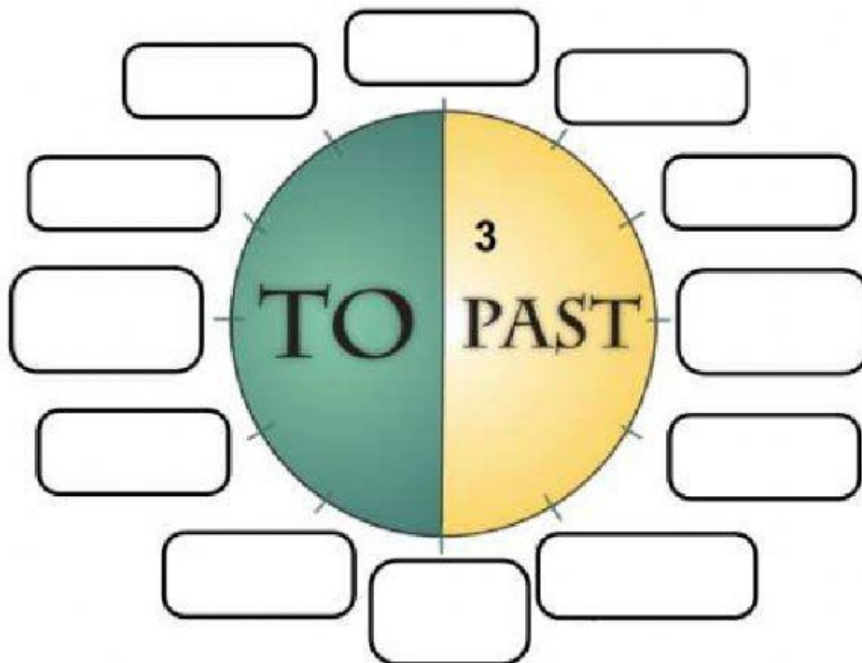
8. Today is Monday. Which day was yesterday? It's...

9. Today is Tuesday. Which day is tomorrow? It's...

9. Today is Friday. Which day is tomorrow? It's...

10 .Today is Wednesday. Which day was yesterday?

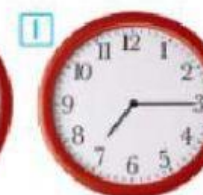
11. If today is Monday, yesterday was Sunday. Which day will it be tomorrow? It will be...





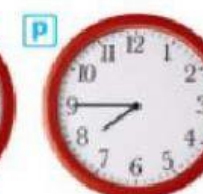
- 1 It's ten o'clock.
- 2 It's seven o'clock.
- 3 It's five o'clock.
- 4 It's three o'clock.

- 5 It's half past eleven.
- 6 It's half past four.
- 7 It's half past one.
- 8 It's half past six.



- 9 It's quarter past seven.
- 10 It's quarter past nine.
- 11 It's quarter past five.
- 12 It's quarter past twelve.

- 13 It's quarter to four.
- 14 It's quarter to eight.
- 15 It's quarter to eleven.
- 16 It's quarter to one.



B MATCHING: What's the Time?

Draw a line to the correct time. Then draw a line to the correct words.

1. half past six
2. six forty
3. a quarter to six
4. six fifty
5. a quarter after six

6:40
6:15
6:30
5:45
6:50

six thirty
six fifteen
ten to seven
twenty to seven
five forty-five

What's the time?

BOARDGAME

