







Name _____

Grade _____ Room _____

	-10 less	
-1 less	257	+1 more
	+10 more	

	-10 less	
-1 less	509	+1 more
	+10 more	

	-10 less	
-1 less	900	+1 more
	+10 more	

Look at the following base ten blocks.



I know the number. It is.....

100 more than this number is.....

100 less than this number is.....

Length

Select mm or cm or m for the followings to measure the length.



12 mm / cm / m



7 mm / cm / m



14 mm / cm / m

Mass

Select g or kg the followings to measure the mass.



5 g / kg



45 g / kg



208 g / kg



25 g / kg

Match the price to the correct type of money.

\$0.50	•	•	
\$5.00	•	•	
\$2.00	•	•	
\$1.00	•	•	
\$0.20	•	•	

\$5 =

750 ¢ =