

# Worksheets for Bridge Course

Classes:- III, IV,V

Medium:- All media


Topic:- ఆకారాలు-ఆకృతులు

Shapes and Spatial Understanding

Name:-

Subject:- Maths

1. Find out the different types of shapes present in the following pictures.



ఈ బొమ్మలో ఈ క్రింది ఆకారాలు ఎన్ని ఉన్నాయో తెలుపండి.

a) Find out the number of following shapes in this picture



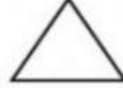
=



=




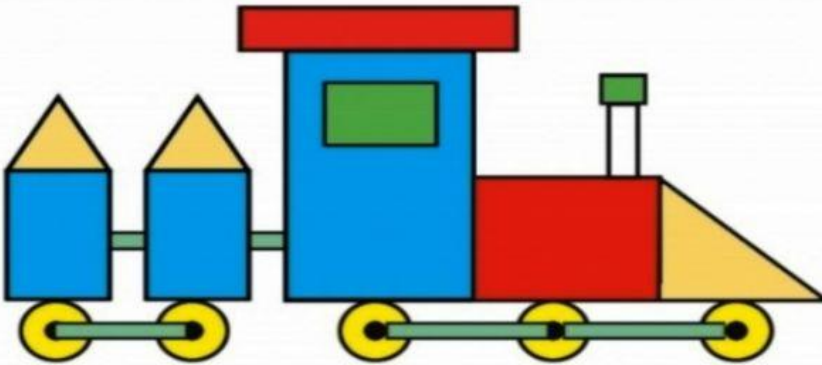
=



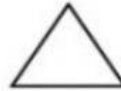
=

b) Find out the number of following shapes in this train picture.

ఈ బొమ్మలో ఈ క్రింది ఆకారాలు ఎన్ని ఉన్నాయో తెలుపండి.



=



=



=



=

పిల్లలూ..10/10 వచ్చాక మీ నోట్ బుక్ లో రాసుకోండి.

Designed by MAHESH MACHARLA.SGT.Mpps kothapet o/c. Jagtial.

LIVEWORKSHEETS