


FRACCIONES PROPIAS E IMPROPIAS




1. Completa la fracción y escribe si es propia, impropia o igual a la unidad.



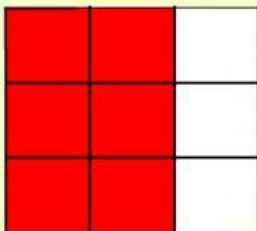
$$\frac{\quad}{5}$$




$$\frac{\quad}{5}$$



$$\frac{4}{\quad}$$



$$\frac{6}{\quad}$$



$$\frac{9}{\quad}$$