

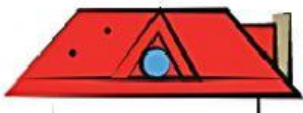



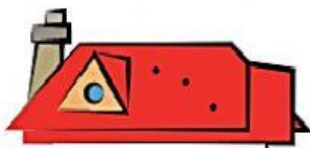







Matemática

Calcula y colorea cada casa del color de su llave.

 $\begin{array}{r} 553 \\ - 247 \\ \hline \end{array}$ <div style="border: 1px solid blue; width: 80px; height: 30px; margin: 10px auto;"></div>	 $\begin{array}{r} 428 \\ - 132 \\ \hline \end{array}$ <div style="border: 1px solid blue; width: 80px; height: 30px; margin: 10px auto;"></div>	 $\begin{array}{r} 360 \\ - 159 \\ \hline \end{array}$ <div style="border: 1px solid blue; width: 80px; height: 30px; margin: 10px auto;"></div>	 92  126  145

 $\begin{array}{r} 385 \\ - 259 \\ \hline \end{array}$ <div style="border: 1px solid blue; width: 80px; height: 30px; margin: 10px auto;"></div>	 $\begin{array}{r} 291 \\ - 146 \\ \hline \end{array}$ <div style="border: 1px solid blue; width: 80px; height: 30px; margin: 10px auto;"></div>	 $\begin{array}{r} 187 \\ - 95 \\ \hline \end{array}$ <div style="border: 1px solid blue; width: 80px; height: 30px; margin: 10px auto;"></div>	 201  306  296

¿Es una suma o una resta? Observa el resultado y escoge el signo.

<table border="1" style="display: inline-table;"> <tr><td>3</td><td>2</td><td>1</td></tr> <tr><td>1</td><td>8</td><td>6</td></tr> <tr><td>5</td><td>0</td><td>7</td></tr> </table> ○	3	2	1	1	8	6	5	0	7	<table border="1" style="display: inline-table;"> <tr><td>5</td><td>6</td><td>2</td></tr> <tr><td>2</td><td>0</td><td>8</td></tr> <tr><td>3</td><td>5</td><td>4</td></tr> </table> ○	5	6	2	2	0	8	3	5	4	<table border="1" style="display: inline-table;"> <tr><td>4</td><td>6</td><td>9</td></tr> <tr><td></td><td>7</td><td>5</td></tr> <tr><td>3</td><td>9</td><td>4</td></tr> </table> ○	4	6	9		7	5	3	9	4	<table border="1" style="display: inline-table;"> <tr><td>5</td><td>3</td><td>4</td></tr> <tr><td></td><td>4</td><td>9</td></tr> <tr><td>5</td><td>8</td><td>3</td></tr> </table> ○	5	3	4		4	9	5	8	3
3	2	1																																					
1	8	6																																					
5	0	7																																					
5	6	2																																					
2	0	8																																					
3	5	4																																					
4	6	9																																					
	7	5																																					
3	9	4																																					
5	3	4																																					
	4	9																																					
5	8	3																																					