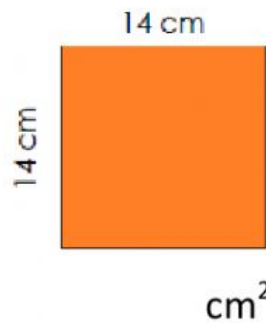


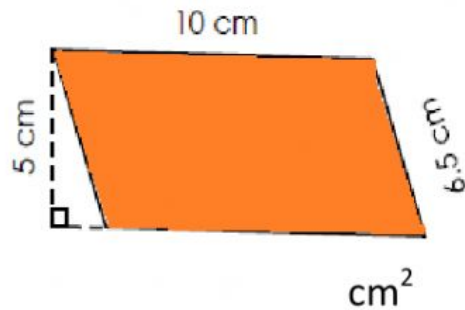
Name

Class

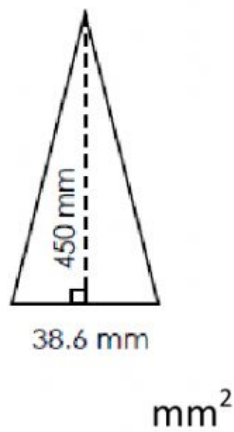
Find the area of the shape.



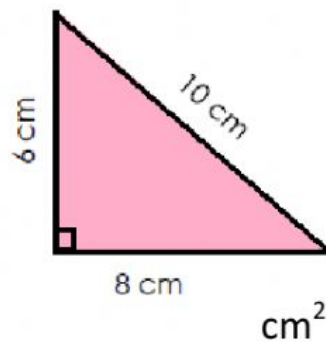
Find the area of the shape.



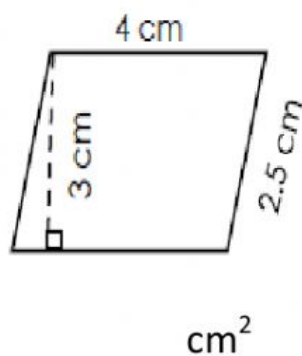
Find the area of the shape.



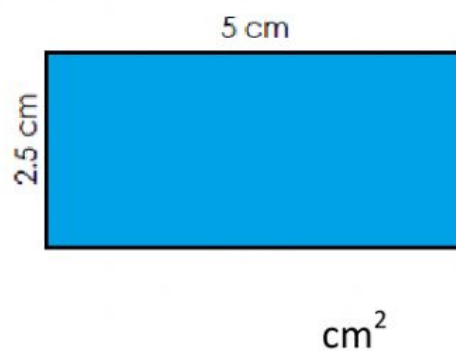
Find the area of the shape.



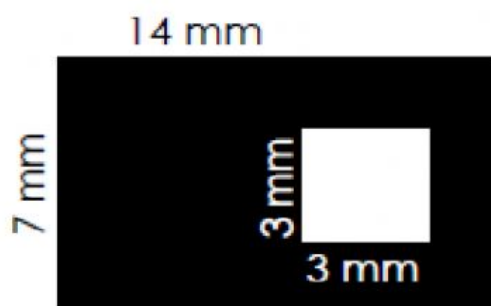
Find the area of the shape.



Find the area of the shape.



Challenge Problem
Find the area of the shaded region.



To find the area of the shaded region

$$\begin{array}{rcl} \begin{array}{c} 14\text{mm} \\ \text{7mm} \end{array} \begin{array}{|c|} \hline \text{Shaded Rectangle} \\ \hline \end{array} & - & \begin{array}{c} 3\text{mm} \\ \text{3mm} \end{array} \begin{array}{|c|} \hline \text{Unshaded Square} \\ \hline \end{array} \\ \text{mm}^2 & - & \text{mm}^2 \\ \hline & & \text{mm}^2 \end{array}$$