

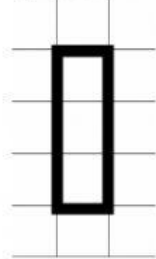
Name \_\_\_\_\_

Date \_\_\_\_\_

Year Group \_\_\_\_\_

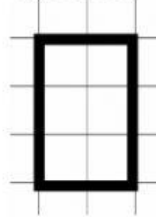
Find the area of the shapes if each square is 1 square centimeters.

Question 1



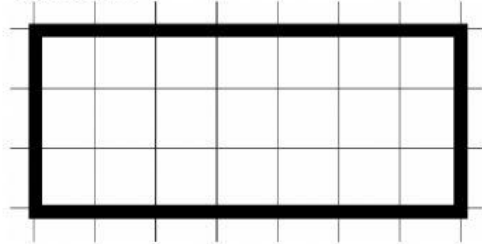
Answer: \_\_\_\_\_  $cm^2$

Question 2




Answer: \_\_\_\_\_  $cm^2$

Question 3



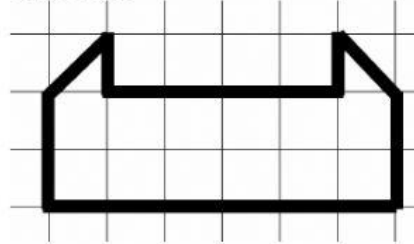
Answer: \_\_\_\_\_  $cm^2$

Question 4



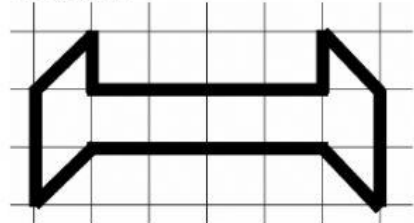
Answer: \_\_\_\_\_  $cm^2$

Question 5



Answer: \_\_\_\_\_  $cm^2$

Question 6



Answer: \_\_\_\_\_  $cm^2$