

# WHAT'S THE TIME?

Drag and drop to the correct time.

1.



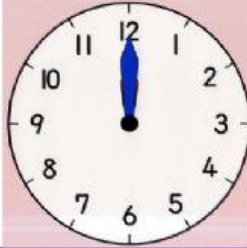
2.



3.



4.



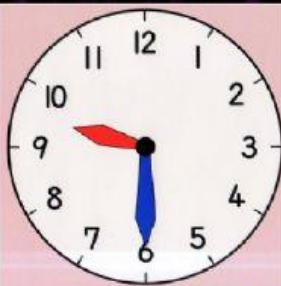
It's half past twelve.

It's twelve o'clock.

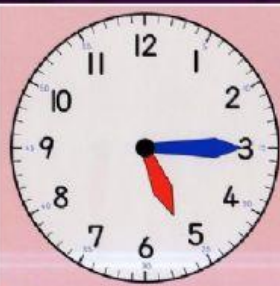
It's half past two.

It's a quarter past two.

5.



6.



7.



It's a quarter to four.

It's a quarter to six.

It's a quarter past eight.

It's half past nine.

It's a quarter past five.

It's a quarter to five.

8.



9.



10.

**8:15**