













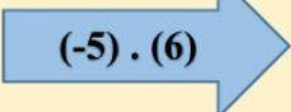



## MULTIPLICACIÓN DE LOS NÚMEROS ENTEROS

Resuelva el ejercicio de la flecha y luego una las respuestas del cuadro

 $(-4) \cdot (-2)$	 12
 $(-6) \cdot (2)$	 8
 $8 \cdot (5)$	 27
 $(-3) \cdot (9)$	 40
 $(9) \cdot (8)$	 30
 $10 \cdot (5)$	 84
 $(7) \cdot (12)$	 50
 $(-5) \cdot (6)$	 72