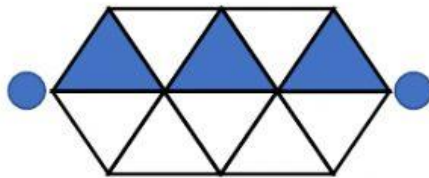


Nama :

Padankan dengan gambar rajah.

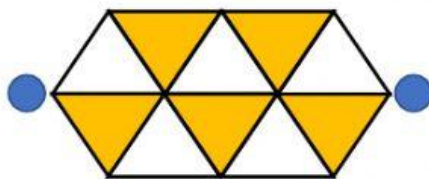


$\frac{5}{10}$




0.5

$\frac{3}{10}$




0.2

$\frac{2}{10}$



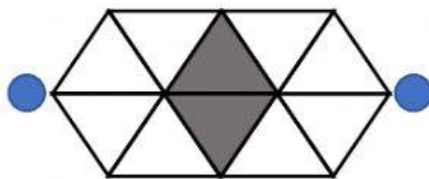
0.6

$\frac{4}{10}$



0.3

$\frac{6}{10}$



0.4

Buat Habis Baik !

cguMijie2021