

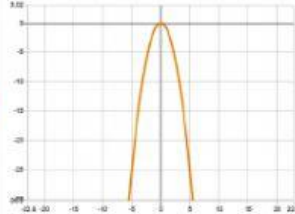
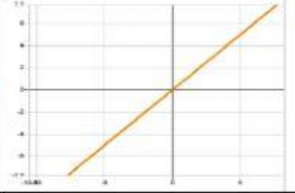
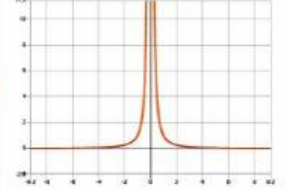
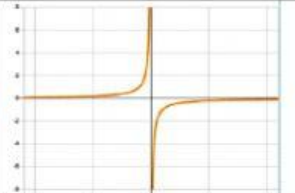
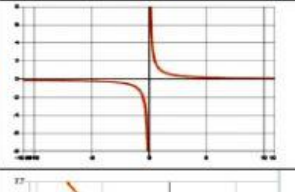

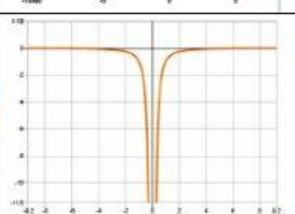
NAMA:

TINGKATAN:

TAJUK: PERSAMAAN DAN GRAF

STANDARD PEMBELAJARAN: MENENTUKAN BENTUK GRAF BERDASARAKAN PERSAMAAN YANG DIBERI

PADANKAN PERSAMAAN DAN GRAF YANG BETUL

$y = -x$	<input type="radio"/>	<input type="radio"/>	
$y = \frac{1}{x}, x \neq 0$	<input type="radio"/>	<input type="radio"/>	
$y = -\frac{1}{x^2}, x \neq 0$	<input type="radio"/>	<input type="radio"/>	
$y = x^2$	<input type="radio"/>	<input type="radio"/>	
$y = -x^2$	<input type="radio"/>	<input type="radio"/>	
$y = x$	<input type="radio"/>	<input type="radio"/>	
$y = -\frac{1}{x}, x \neq 0$	<input type="radio"/>	<input type="radio"/>	
$y = \frac{1}{x^2}, x \neq 0$	<input type="radio"/>	<input type="radio"/>	