

TRASCINA I SIMBOLI NUMERICI E COSTRUISCI LE CIFRE



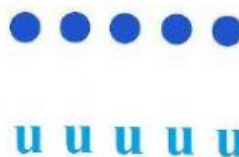


5 =	?	+	
-----	---	---	--

14 =	?	+	
------	---	---	--

38 =	?	+	
------	---	---	--

52 =	?	+	
------	---	---	--

27 =	?	+	
------	---	---	--



OSSERVA E SCRIVI IL SEGNO APPROPRIATO: > < =  
DUE DECINE SONO UGUALI A DUE UNITA'?

