

PUPS - Thukkiyampalayam  
5th Std - Maths Worksheet - 6

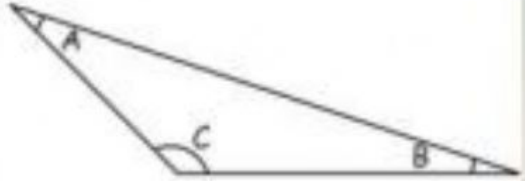





Name: \_\_\_\_\_

Date: \_\_\_\_\_

Unit - 1 Geometry

Page No: 7



- 1 The angles below  $90^\circ$  are called as \_\_\_\_\_
- 2 The angles above  $90^\circ$  are called as \_\_\_\_\_
- 3 By joining two right angles \_\_\_\_\_ angle is formed
- 4 The obtuse angle in  $\triangle ABC$  is \_\_\_\_\_  
a.  $\angle A$       b.  $\angle B$       c.  $\angle C$   

- 5 Hand of a clock at 3.20 shows \_\_\_\_\_ angle.
- 6 In the following letters, which one forms the right angle?  
a. L      b. K      c. Z      d. N
- 7 Circle the right angle.  
a.       b.       c.       d. 
- 8 The angle shown in this picture is \_\_\_\_\_  
      a. more than  $120^\circ$       b. Less than  $45^\circ$   
c. more than  $180^\circ$       d.  $90^\circ$
- 9 The angle formed by the nail cutter is \_\_\_\_\_
- 10 Name the angles formed when, the vessels are lifted by tongs in the kitchen.