





¡Vamos a sumar!


Escribe el número de elementos en cada cuadro y suma.





$$\square + \square = \square$$





$$\square + \square = \square$$





$$\square + \square = \square$$



$$\square + \square = \square$$



$$\square + \square = \square$$



$$\square + \square = \square$$