

NAMA :


AKTIVITI 4

Lengkapkan ayat matematik

a

Ada 4 kek.
Efa makan 2. Tinggal lagi 2.


4		2		
---	--	---	--	--



b

Haziq ada 9 botol susu.
Dia keluarkan 3 botol.
Baki 6 botol susu.

9		3		6
---	--	---	--	---



c

Ada 7 burung.
3 burung terbang.
Tinggal 4 burung.

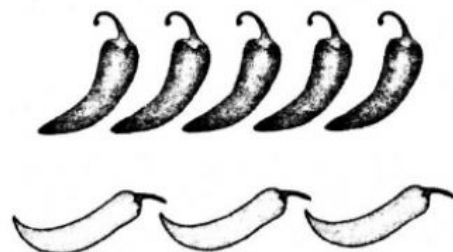
7				
---	--	--	--	--



d

Ada 8 cili. 5 cili merah.
Selebihnya, 3 cili hijau.

--	--	--	--	--

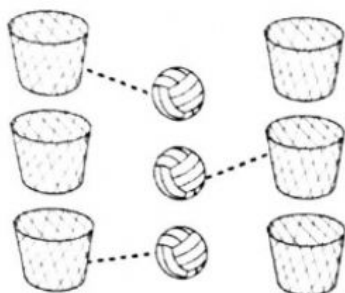


NAMA :

AKTIVITI 6


Lengkapkan ayat matematik

a



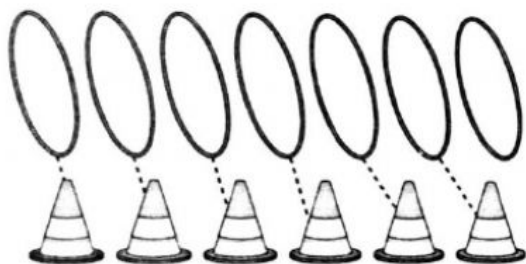
$$6 - 3 = \square$$

b



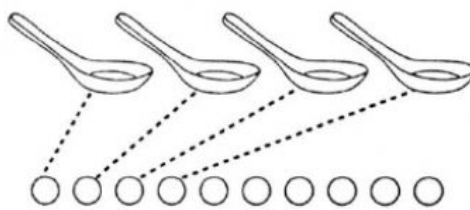
$$8 - 6 = \square$$

c



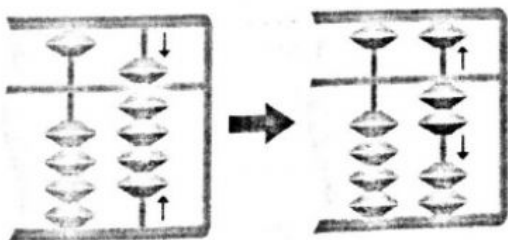
$$7 - \square = \square$$

d



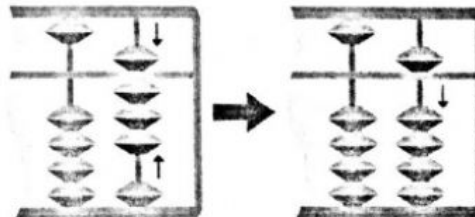
$$10 - \square = \square$$

e



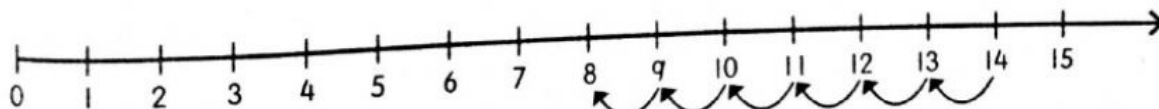
$$9 - 7 = \square$$

f



$$8 - 3 = \square$$

g



$$14 - \square = \square$$