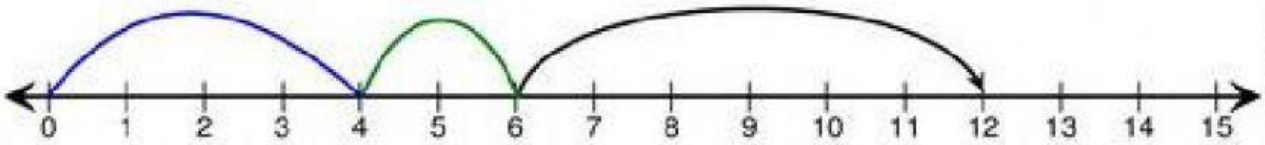


PRACTICA SUMAS EN LA SEMIRRECTA NUMÉRICA

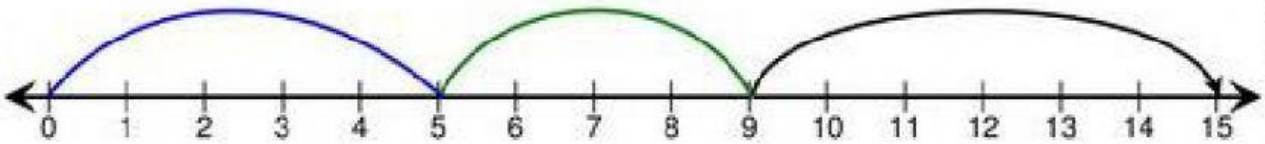
OBSERVA Y CUENTA LOS SALTOS Y ESCRIBE LOS SUMANDO Y LA SUMA O TOTAL DE CADA OPERACIÓN.

1)



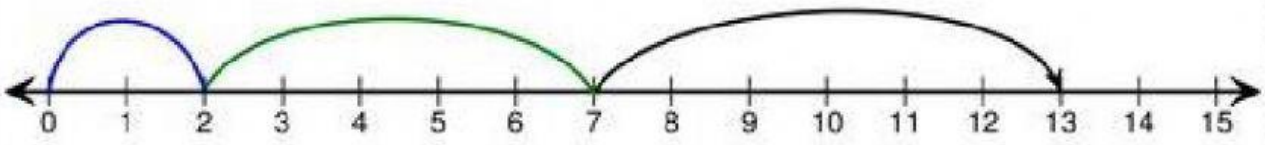
$$\boxed{} + \boxed{} + \boxed{} = \boxed{}$$

2)



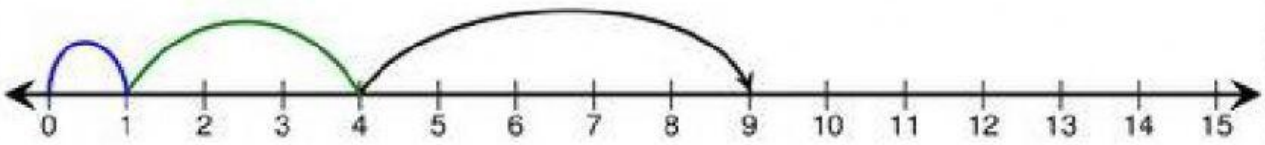
$$\boxed{} + \boxed{} + \boxed{} = \boxed{}$$

3)



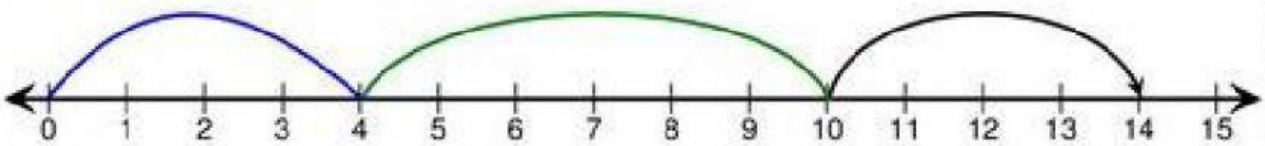
$$\boxed{} + \boxed{} + \boxed{} = \boxed{}$$

4)



$$\boxed{} + \boxed{} + \boxed{} = \boxed{}$$

5)



$$\boxed{} + \boxed{} + \boxed{} = \boxed{}$$