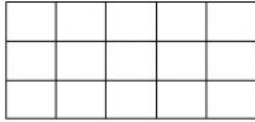


## Perimeter and Area Worksheet

Each square on the sheet is 1 square cm. Remember area is the number of squares inside, and perimeter is the distance round the outside of the shape

1)



Area= \_\_\_\_\_ Square cm

Perimeter= \_\_\_\_\_ cm

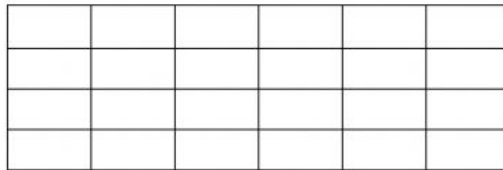
2)



Area=\_\_\_\_\_Square cm

Perimeter=\_\_\_\_\_cm

3)

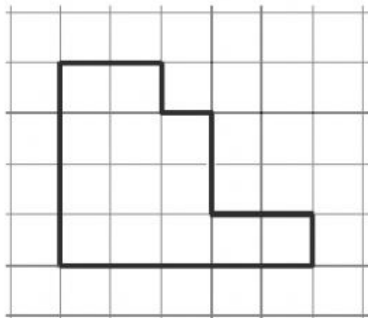


Area=\_\_\_\_\_Square cm

Perimeter=\_\_\_\_\_cm

4)

**Count Grid boxes which is in dark black colour**



Area=\_\_\_\_\_Square cm

Perimeter =\_\_\_\_\_cm

**5) Count Grid boxes which is in Red colour**

Area=\_\_\_\_\_Square cm

Perimeter=\_\_\_\_\_cm

